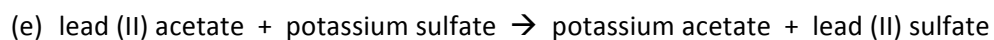
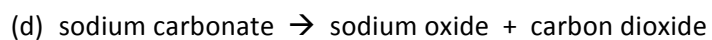
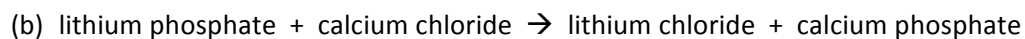
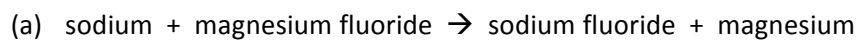


Honors Chemistry: Homework Set 8-6

1. Write a balanced equation for each of the following reactions, and then identify the type of reaction.



2. Complete and balance the following equations. Identify each reaction by type.

